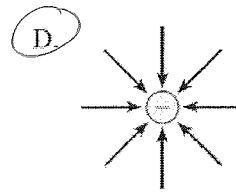
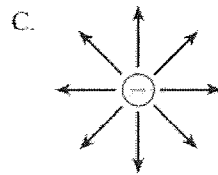
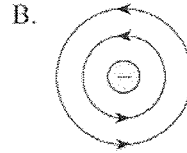
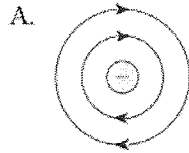


Name: Key

Electrostatics Review Package

1. Which diagram shows the electric field near a negative point charge?



2. Which pair of values will cause the greatest deflection of an electron beam in a cathode ray tube?

↳ slowest V_a smaller
↳ V_s larger

	ACCELERATING VOLTAGE	DEFLECTION (PLATE) VOLTAGE
A.	400 V ✓	20 V
B.	400 V ✓	40 V ✓
C.	800 V	20 V
D.	800 V	40 V ✓

3. The magnitude of the net electric field at P in the diagram below is $5.0 \times 10^3 \text{ N/C}$.

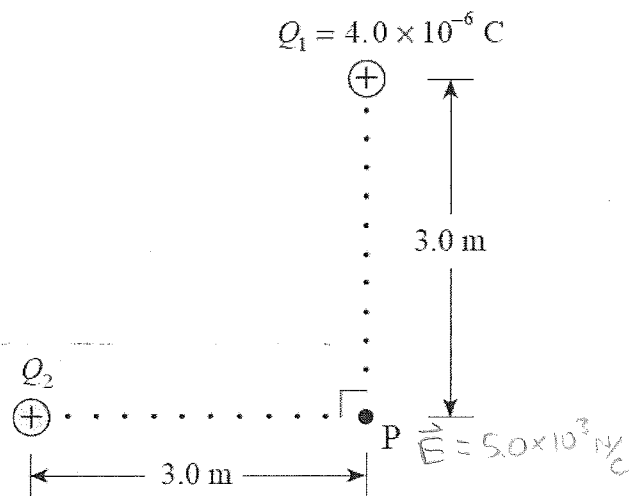
vector

$$E^2 = E_1^2 + E_2^2$$

$$(5.0 \times 10^3)^2 = \left(\frac{kQ_1}{R^2}\right)^2 + \left(\frac{kQ_2}{R^2}\right)^2$$

$$Q_2 = 3.0 \times 10^{-6} \text{ C} \quad \checkmark$$

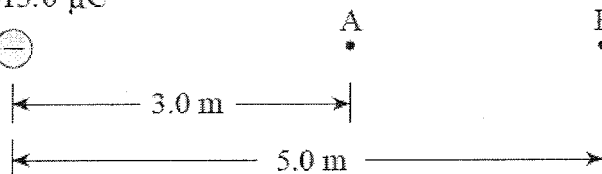
Find the magnitude of charge Q_2 .



4. a) Find the electric potential ~~energy~~ at point A and at point B. (Note: $1.0 \mu\text{C}$ is $1.0 \times 10^{-6} \text{ C}$)

$$V_A = \frac{kQ}{R_A} = \frac{(9 \times 10^9)(-15 \times 10^{-6})}{3 \text{ m}} = -4.5 \times 10^4 \text{ V} \checkmark$$

$$Q = -15.0 \mu\text{C}$$



$$V_B = \frac{kQ}{R_B} = -2.7 \times 10^4 \text{ V} \checkmark$$

- b) What is the potential difference between A and B?

$$\Delta V = |V_B - V_A| = 1.8 \times 10^4 \text{ V} \checkmark$$

- c) 0.036 J of work must be done to move a charge q from A to B. Find the magnitude and polarity of this charge.

$$\Delta V = \frac{\Delta E_p}{Q}$$

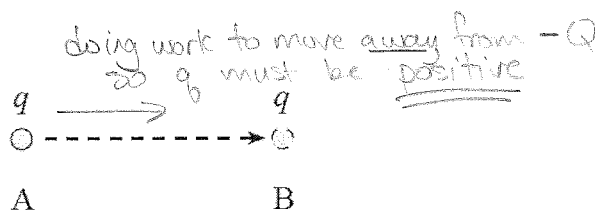
$$Q = \frac{\Delta E_p}{\Delta V}$$

$$= \frac{0.036 \text{ J}}{1.8 \times 10^4 \text{ V}}$$

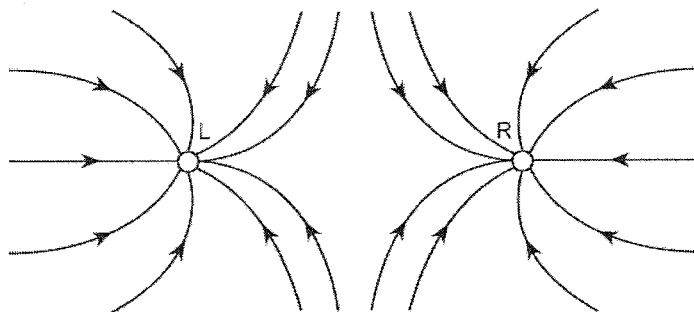
$$Q = -15.0 \mu\text{C}$$



$$= 2.0 \times 10^{-6} \text{ C} \checkmark$$



5. The diagram shows the electric field lines near two point charges, L and R. identify the polarity of these point charges.



+ test charge moving toward so L and R must both be neg.

	POLARITY OF L	POLARITY OF R
✓ A.	Negative	Negative
B.	Negative	Positive
C.	Positive	Negative
D.	Positive	Positive

6. An electron orbits the nucleus which carries a charge of $+9.6 \times 10^{-19} \text{ C}$. If the electron's orbital radius is $2.0 \times 10^{-10} \text{ m}$, what is its potential energy?

scalar - use signs in equation

$$E_p = \frac{kQQ}{R} = \frac{(9 \times 10^9)(-1.6 \times 10^{-19})(+9.6 \times 10^{-19})}{2 \times 10^{-10}} = -6.9 \times 10^{-18} \text{ J}$$

7. Two charges are positioned as shown in the diagram below.

$$\vec{E}_1 = \frac{kQ_1}{R_1^2} = \frac{(9 \times 10^9)(8 \times 10^{-6})}{(6 \text{ m})^2} = 2000 \frac{\text{N}}{\text{C}} [\text{R}]$$

$$\vec{E}_2 = \frac{kQ_2}{R_2^2} = \frac{(9 \times 10^9)(-2.0 \times 10^{-6})}{(2 \text{ m})^2} = -4500 \frac{\text{N}}{\text{C}} [\text{L}]$$

Diagram: Two positive charges $Q_1 = 8.0 \mu\text{C}$ and $Q_2 = -2.0 \mu\text{C}$ are separated by 4.0 m. A point A is located 2.0 m to the right of Q_2 .

- a) Find the magnitude and direction of the electric field at A.

(Note: $1.0 \mu\text{C}$ is $1.0 \times 10^{-6} \text{ C}$)

$$\vec{E}_{\text{net}} = 2500 \frac{\text{N}}{\text{C}} [\text{L}]$$

- b) A charge placed at A experiences a force of $4.0 \times 10^{-3} \text{ N}$ towards the right. What are the magnitude and polarity of this charge?

(Since \vec{E} is [L], pos test charge has F to left)

8. In a cathode ray tube,

A. protons are accelerated from anode (positive) to cathode (negative).

B. protons are accelerated from cathode (negative) to anode (positive).

C. electrons are accelerated from anode (positive) to cathode (negative).

D. electrons are accelerated from cathode (negative) to anode (positive).

9. Charge Q_1 is located 5.0 m from charge Q_2 as shown


$$W = \Delta E_p = kQ_1Q_2 \left(\frac{1}{r_2} - \frac{1}{r_1} \right)$$

$$= 1.2 \times 10^{-2} \text{ J}$$

Diagram: Two positive charges $Q_1 = 2.0 \times 10^{-6} \text{ C}$ and $Q_2 = 5.0 \times 10^{-6} \text{ C}$ are separated by 5.0 m. Q_1 is 2.0 m from a point, and Q_2 is 3.0 m from the same point.

How much work must be done to move charge Q_1 2.0 m closer to charge Q_2 .

10. An electron passing between parallel plates 0.025 m apart experiences an upward electrostatic force of $5.1 \times 10^{-16} \text{ N}$.



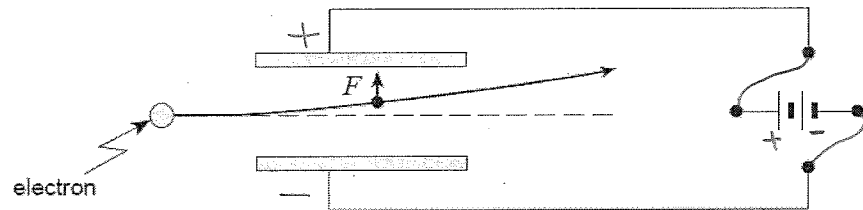
$$\vec{E} = \frac{F}{Q} = \frac{5.1 \times 10^{-16} \text{ N}}{1.6 \times 10^{-19} \text{ C}} = 3.2 \times 10^3 \frac{\text{N}}{\text{C}}$$

- a) What is the magnitude of the electric field between the plates? -uniform \rightarrow

- b) What is the potential difference between the plates?

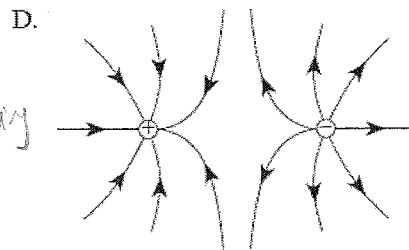
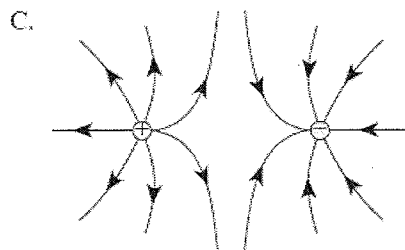
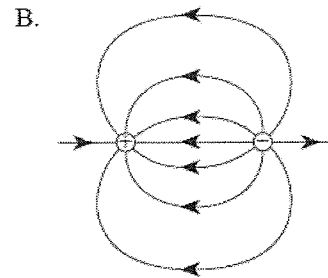
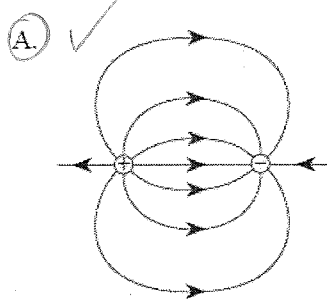
$$\Delta V = Ed = (3.1875 \times 10^3 \frac{\text{N}}{\text{C}})(0.025 \text{ m}) = 80 \text{ V}$$

- c) On the diagram below draw in the connections to the power supply necessary for the electron to experience this upward force.



11. Which of the following diagrams shows the electric field between two equal but opposite charges?

For charges of diff magnitude
 + -
 diff charge
 or
 Same charge

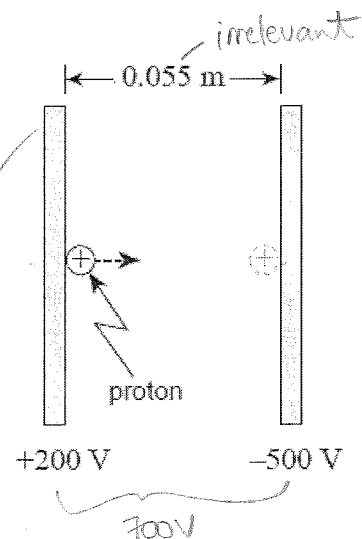


12. A proton initially at rest is accelerated between parallel plates through a potential difference of 700 V.

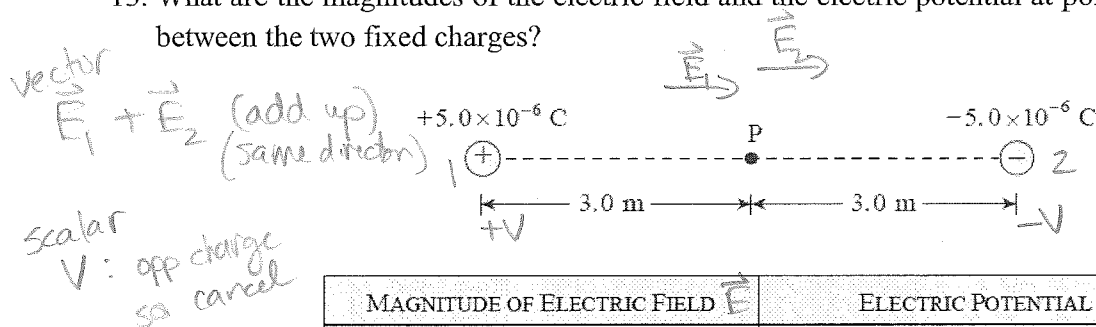
$$\Delta E_p = \Delta VQ = \frac{1}{2}mv^2$$

$$v = \sqrt{\frac{\Delta VQ \times 2}{m}} = 3.7 \times 10^5 \text{ m/s}$$

What is the maximum speed reached by the proton?

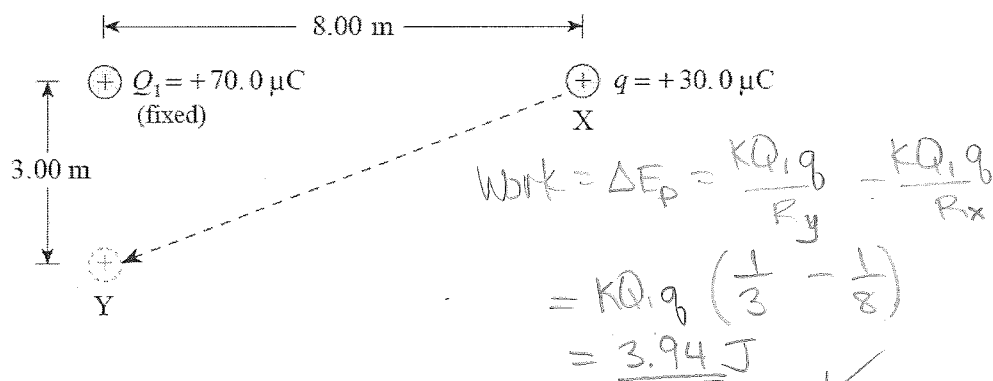


13. What are the magnitudes of the electric field and the electric potential at point P midway between the two fixed charges?



	MAGNITUDE OF ELECTRIC FIELD \vec{E}	ELECTRIC POTENTIAL V
A.	0 N/C	0 V ✓
B.	0 N/C	30 000 V
✓ C.	10 000 N/C ✓	0 V ✓
D.	10 000 N/C ✓	30 000 V


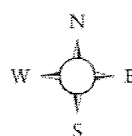
14. A charge q of $30.0 \mu\text{C}$ is moved from point X to point Y.



How much work is done on the $30.0 \mu\text{C}$ charge? (Note: $1.0 \mu\text{C}$ is $1.0 \times 10^{-6} \text{ C}$)

15. An electron in the electric field has an electric force acting on it in what direction?

[west] ✓



16. What is the potential at point P due to the two fixed charges as shown?

Scalar

$$V_1 = \frac{kQ_1}{R_1}$$

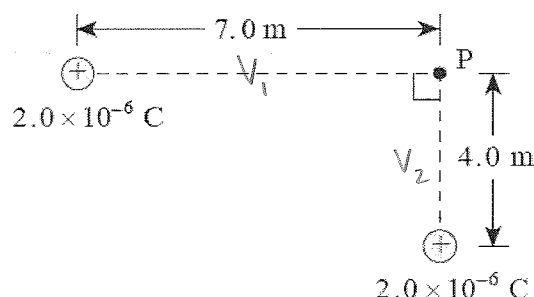
$$= \frac{(9 \times 10^9)(2 \times 10^{-6})}{7}$$

$$= 2.571 \times 10^3 \text{ V}$$

$$V_2 = \frac{kQ_2}{R_2}$$

$$= 4500 \text{ V}$$

$$V_1 + V_2 = 7.1 \times 10^3 \text{ V} \quad \checkmark$$



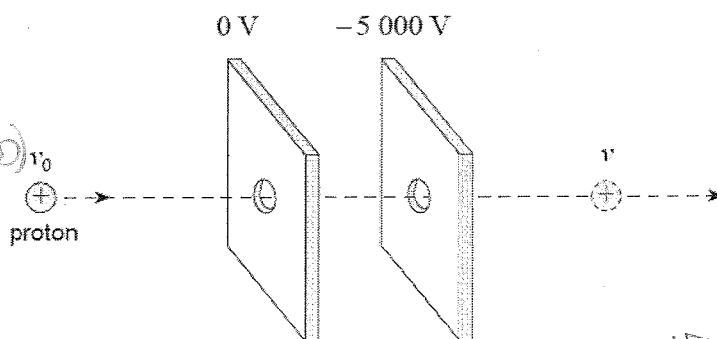
17. A moving proton ^{already has} has $6.4 \times 10^{-16} \text{ J}$ of kinetic energy. The proton is accelerated by a potential difference of 5 000 V between parallel plates.

energy gained

$$\Delta E_p = Q\Delta V$$

$$= (1.6 \times 10^{-19} \text{ C})(5000 \text{ V})$$

$$= 8.0 \times 10^{-16} \text{ J}$$



$$E_{\text{Total}} = 6.4 \times 10^{-16} \text{ J} + 8.0 \times 10^{-16} \text{ J}$$

$$= 1.44 \times 10^{-15} \text{ J}$$

$$= \frac{1}{2} mv^2$$

$$v = \sqrt{\frac{2(1.44 \times 10^{-15} \text{ J})}{1.67 \times 10^{-27} \text{ kg}}}$$

The proton emerges from the parallel plates with what speed?

$$v = 1.3 \times 10^6 \text{ m/s} \checkmark$$


18. a) How much work is done in moving an electron from point X to point Y?

$$W = \Delta E_p$$

$$= kQq \left(\frac{1}{r_f} - \frac{1}{r_i} \right)$$

$$= 9 \times 10^9 (-1.6 \times 10^{-19} \text{ C})(-5.0 \times 10^{-6} \text{ C}) \left(\frac{1}{1} - \frac{1}{1.5} \right)$$

$$= 2.4 \times 10^{-15} \text{ J} \checkmark$$



$$Q = -5.0 \times 10^{-6} \text{ C}$$

- b) What is the potential difference between point X and point Y?

$$\Delta E_p = \Delta VQ$$

$$\Delta V = \frac{\Delta E_p}{Q} = \frac{2.4 \times 10^{-15}}{1.6 \times 10^{-19}}$$

$$= 1.5 \times 10^4 \text{ V} \checkmark$$

19. The electric field is uniform between

- A. two positive point charges.
B. two negative point charges.
C. two opposite point charges.
D. two oppositely charged parallel plates. \checkmark

20. What is the magnitude and direction of the electric field at point P due to the two fixed charges?

$$E_1 = \frac{kQ_1}{R^2}$$

$$= \frac{(9 \times 10^9)(4 \times 10^{-6})}{4^2}$$

$$= 2250 \frac{\text{N}}{\text{C}} \text{ to the right}$$

$$E_2 = \frac{(9 \times 10^9)(1 \times 10^{-6})}{1^2}$$

$$= 9000 \frac{\text{N}}{\text{C}} \text{ to the left}$$

A.

B. \checkmark

C.

D.

$$+4.0 \times 10^{-6} \text{ C}$$



$$-1.0 \times 10^{-6} \text{ C}$$



ELECTRIC FIELD AT POINT P	
MAGNITUDE	DIRECTION
6 800 N/C \checkmark	Right
6 800 N/C \checkmark	Left \checkmark
11 000 N/C	Right
11 000 N/C	Left \checkmark

$$9000 - 2250$$

$$= 6750 \frac{\text{N}}{\text{C}} [\text{L}] = 6.8 \times 10^3 \frac{\text{N}}{\text{C}} [\text{L}]$$

21. A proton with kinetic energy of $2.1 \times 10^{-17} \text{ J}$ is moving into a region of charged parallel plates. The proton will be stopped momentarily in what region?

$\Delta V = \frac{\Delta E_p}{Q}$
 $= \frac{2.1 \times 10^{-17} \text{ J}}{1.6 \times 10^{-19} \text{ C}}$
 $= 131.25 \text{ V}$

2.1 $\times 10^{-17} \text{ J}$ proton \rightarrow

0 V 100 V 200 V 300 V 400 V

K L M N

stops then reverses direction

plates getting more and more positive so will repel proton

22. A proton, initially at rest at point X, will have what speed at point Y?

$\Delta E_p = E_k$
 $= kQq \left(\frac{1}{r_f} - \frac{1}{r_i} \right)$
 $= 9 \times 10^9 (1.6 \times 10^{-19}) (3.5 \times 10^{-6}) \left(\frac{1}{3} - \frac{1}{1} \right) = 3.36 \times 10^{-15} \text{ J} = \frac{1}{2} mv^2$

+3.5 $\times 10^{-6} \text{ C}$ Fixed charge

Proton repelled

1.0 m 2.0 m

X Y

$v = \sqrt{\frac{2\Delta E_p}{m}}$
 $= \sqrt{\frac{2(3.36 \times 10^{-15})}{1.67 \times 10^{-27}}}$
 $= 2.0 \times 10^6 \text{ m/s}$

23. Which of the following best describes how electric potential varies with distance in the region around a point charge?

$$V = \frac{kQs}{R}$$

- A. $V \propto r$
 B. $V \propto \frac{1}{r}$ ✓
 C. $V \propto r^2$
 D. $V \propto \frac{1}{r^2}$

24. Three identical positive electric charges are fixed as shown in the diagram below.

$F_E = \frac{kQq}{R^2}$
 $F \propto \frac{1}{R^2}$

bigger R \Rightarrow smaller F so $F_3 > F_1$ so F_{net} is to left ✓

What is the direction of the net electric force on Q_2 due to Q_1 and Q_3 ?

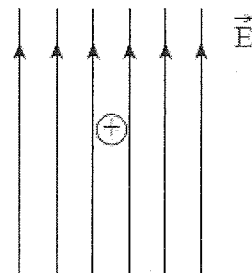
$F_{3 \text{ on } 2}$ $F_{1 \text{ on } 2}$

Q_1 Q_2 Q_3

d $\frac{d}{2}$

25. In an experiment, a positively charged oil droplet weight $6.5 \times 10^{-15} \text{ N}$ is held stationary by a vertical electric field as shown in a diagram.


If the electric field strength is $5.3 \times 10^3 \text{ N/C}$, what is the charge on the oil droplet?



$F_g = F_E$
 $mg = qE$
 $q = \frac{mg}{E} = \frac{6.5 \times 10^{-15} \text{ N}}{5.3 \times 10^3 \text{ N/C}} = 1.2 \times 10^{-18} \text{ C}$ ✓

Electrostatics Answers

1. D (Aug '99, 18)
2. B (Aug '99, 19)
3. 3.0×10^{-6} (Aug '99, 20)
4. a) $V_A = -4.5 \times 10^4 \text{V}$ $V_B = -2.7 \times 10^4 \text{V}$ (Aug '99, 5LA)
b) $1.8 \times 10^4 \text{V}$
c) $+2.0 \times 10^{-6} \text{C}$
5. A (Jan. '99, 18)
6. $-6.9 \times 10^{-19} \text{J}$ (Jan '99, 19)
7. a) $E = 2.5 \times 10^3 \text{N/C}$ to the left (Jan '99, 5LA)
b) $-1.6 \times 10^{-6} \text{C}$
8. D (June '99, 19)
9. 1.2×10^{-2} (June '99, 20)
10. a) $3.2 \times 10^3 \text{N/C}$ (June '99, 5LA)
b) 80V
c)



11. A (Jan. '00, 19)
12. $3.7 \times 10^5 \text{m/s}$ (Jan. '00, 20)
13. C (Jan '00, 21)
14. $W = \Delta E \rightarrow E_{Py} - E_{Px} \rightarrow 3.9 \text{J}$ (3.94J) (Jan '00, 5LA)
15. West (June '00, 18)
16. $7.1 \times 10^3 \text{V}$ (June '00, 19)
17. $1.3 \times 10^6 \text{m/s}$ (June '00, 20)
18. a) $2.4 \times 10^{-15} \text{J}$ (June '00, 5LA)
b) $1.5 \times 10^4 \text{V}$
19. D (Aug '00, 18)
20. B (Aug '00, 19)
21. L (Aug '00, 20)
22. $2.0 \times 10^6 \text{m/s}$ (Aug. '00, 5LA)
23. B (Jan'01, 20)
24. to the left (Jan '01, 20)
25. $1.2 \times 10^{-18} \text{C}$ (Jan. '01, 22)